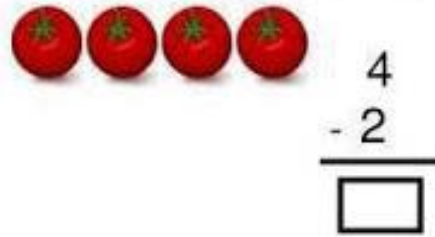



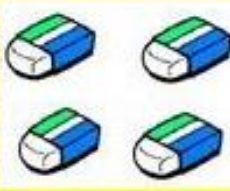
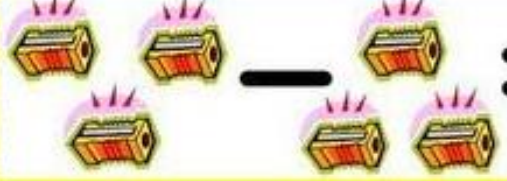


EJERCICIOS

1. Realice las siguientes restas:



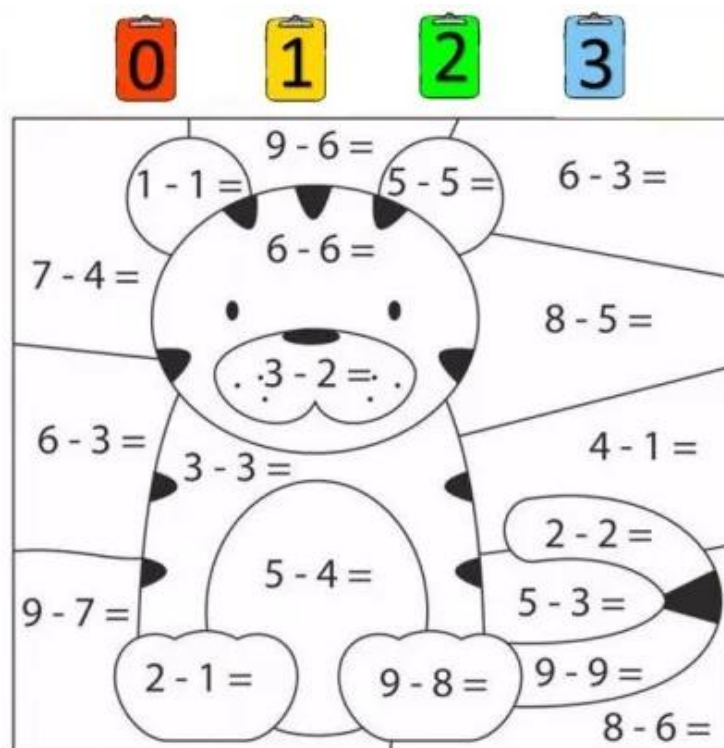
 $8 - 3 =$	
 $5 - 2 =$	
 $4 - 1 =$	
 $5 - 2 =$	

$\begin{array}{r} 6 \\ - 3 \\ \hline \end{array}$	$\begin{array}{r} 5 \\ - 1 \\ \hline \end{array}$	$\begin{array}{r} 8 \\ - 5 \\ \hline \end{array}$	$\begin{array}{r} 6 \\ - 2 \\ \hline \end{array}$
---	---	---	---

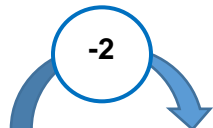
$\begin{array}{r} 9 \\ - 3 \\ \hline \end{array}$	$\begin{array}{r} 2 \\ - 1 \\ \hline \end{array}$	$\begin{array}{r} 4 \\ - 2 \\ \hline \end{array}$	$\begin{array}{r} 7 \\ - 5 \\ \hline \end{array}$
---	---	---	---

$\begin{array}{r} 7 \\ - 3 \\ \hline \end{array}$	$\begin{array}{r} 5 \\ - 4 \\ \hline \end{array}$	$\begin{array}{r} 8 \\ - 2 \\ \hline \end{array}$	$\begin{array}{r} 9 \\ - 6 \\ \hline \end{array}$
---	---	---	---

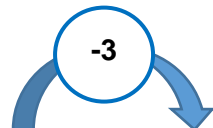
2. Colorea según el resultado



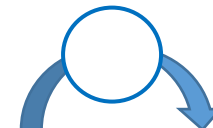
3. Escribe los números que faltan en cada tabla:



8	
5	
3	



	3
	5
	2



	4
5	1
	5